




Determine if the shape is translating (slide), rotating (turn) or reflecting (flip).

Answers


1)



2)



3)

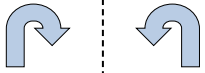


1. _____

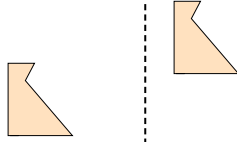
2. _____

3. _____

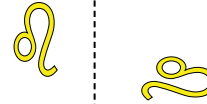
4)



5)



6)




4. _____


5. _____

6. _____

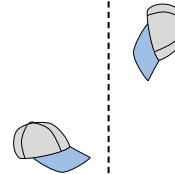
7)



8)



9)



7. _____

8. _____

9. _____

10. _____

11. _____

10)



11)



12)



12. _____

13. _____

14. _____

15. _____

13)



14)



15)





Determine if the shape is translating (slide), rotating (turn) or reflecting (flip).


1)



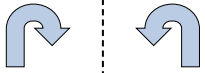
2)



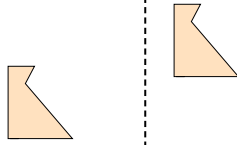
3)



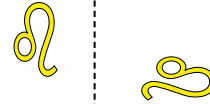
4)



5)




6)



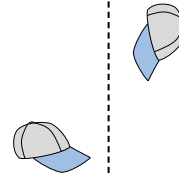
7)



8)



9)



10)



11)



12)



13)



14)



15)



Answers

1. **reflecting**

2. **translating**

3. **rotating**

4. **reflecting**

5. **translating**

6. **rotating**

7. **reflecting**

8. **translating**

9. **rotating**

10. **reflecting**

11. **translating**

12. **rotating**

13. **reflecting**

14. **translating**

15. **rotating**